

SAMPLE QUESTIONS – DAT (HT)-2025

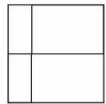
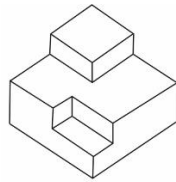
(These sample questions are subject to change as per management discretion)

<ul style="list-style-type: none"> • 50 MCQ Questions to examine <li style="margin-left: 20px;">1. Visual & Spatial ability <li style="margin-left: 20px;">2. General Knowledge <li style="margin-left: 20px;">3. Logical reasoning <li style="margin-left: 20px;">4. Observation & Memory 	<p style="margin: 0;">1 mark each MCQ</p> <p style="margin: 0;">Time: 20 minutes.</p> <p style="margin: 0;">Total Marks : 50</p>
---	--

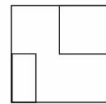
Part A – MCQ (50 Questions / 50 Marks) – 20 min

Visual and Spatial ability (3)

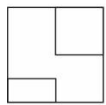
1 Which of these images is the top view of the given object?



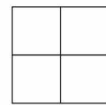
A



B

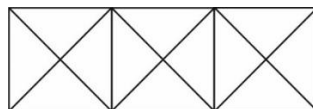


C




D

2 How many Squares and How many Triangles are there in the diagram given below:



1. It contains 28 Triangles & 10 Squares.
2. It contains 20 Triangles & 8 Squares
3. It contains 28 Triangles and 5 Squares
4. 32 Triangles' & 8 Squares

3. Which of the one of five figures fully represent the development layout provided in the top



A



B



C



D



E

Observation and memory (3)


1.

The Logo of LG is given below. What is its usual colour?



A) Red; B) Blue; C) Magenta; D) Pink.

2.




The style of weave of the dress material is called as:

A) Poochampalli B) ilkall C). ikat D). Hacoba

3. Indian important heritage monument "India Gate" is:




A



B



C



D

Logical reasoning (2)

1. Mara runs faster than Gail; Lily runs faster than Mara; Gail runs faster than Lily.

If the first two statements are true, the third statement is

A.true B.false C.uncertain

2. Secretly is to openly as silently is to


A.scarcely; B.impolitely; C.noisily; D.quietly

General Knowledge / Current Affairs (2)

1. Present CM of New Delhi:

A. Arvind Kejriwal; B. Sheela Dixit; C. Rekha Gupta; D. Atishi Marlena

2. Identify the Gond Art form from the following options shown:



Part B

Studio Test / Design Challenge: Problem Solving & Sketching of the concept.

(2 Questions: Both are compulsory / 25 Marks each / Total: 50 Marks/ Time: 40 min)


Requirements:

Please carry below items for the Studio Test: Cartridge paper A3 size. Pencils HB/2B, 4B/6B, erasers, sharpener, pencil colours, Sketch pens etc.

Note: Usage of scale is strictly prohibited in the studio test/ design challenge.

1.

You are given two products that should be combined in anyway and sized to create a new product to have a new function / enhanced function. Draw the iterations and final design. Label the parts and write a brief explanation.



2.

Imagine a new age car that runs on sustainable fuel and Draw and shade the final concept Name it. Add your own new logo. Assume number of seats / Power etc.

: End of DAT Question Paper: